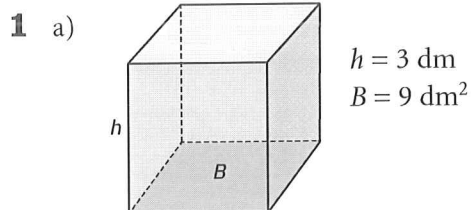
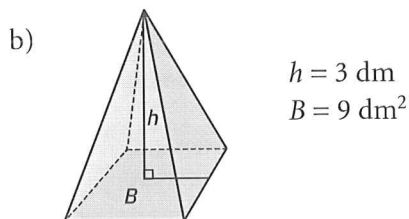


Kroppars volym

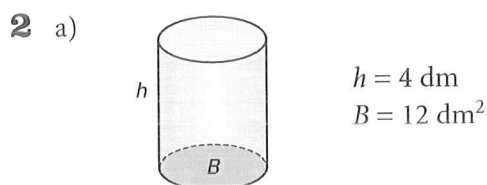
Beräkna volymen. Använd  $\pi \approx 3$ .



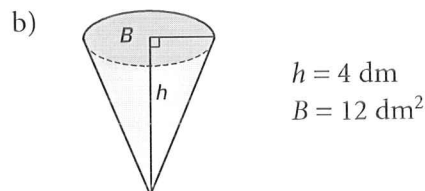
Volym: 27 dm<sup>3</sup>



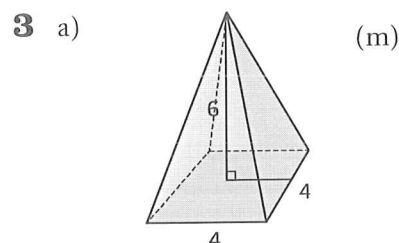
Volym: 9 dm<sup>3</sup>



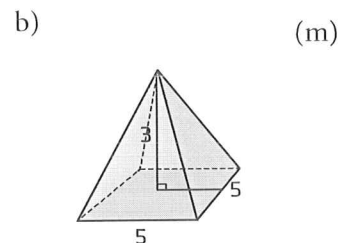
Volym: 48 dm<sup>3</sup>



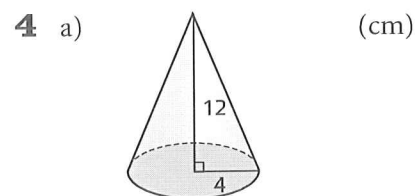
Volym: 16 dm<sup>3</sup>



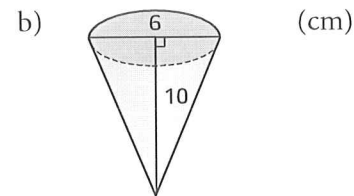
Volym: 32 m<sup>3</sup>



Volym: 25 m<sup>3</sup>



Volym: 192 cm<sup>3</sup>



Volym: 25 cm<sup>3</sup>