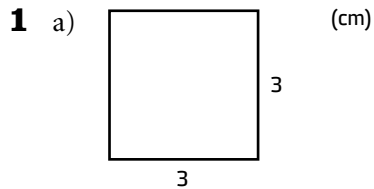


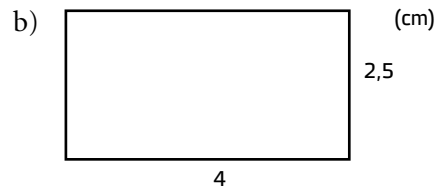
Repetition av area och omkrets

Beräkna omkrets och area av figurerna. Använd $\pi \approx 3$.



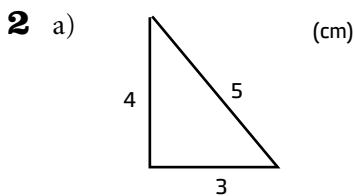
Omkrets: _____

Area: _____



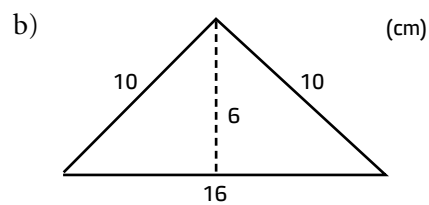
Omkrets: _____

Area: _____



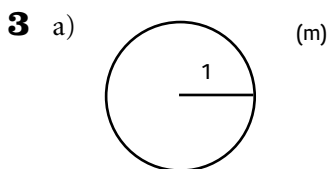
Omkrets: _____

Area: _____



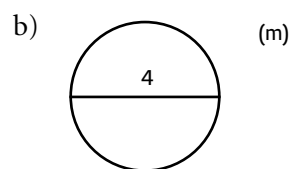
Omkrets: _____

Area: _____



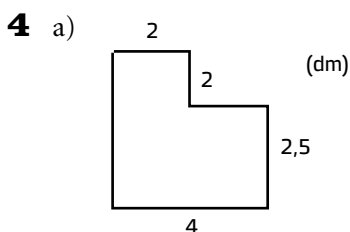
Omkrets: _____

Area: _____



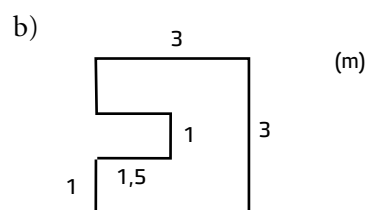
Omkrets: _____

Area: _____



Omkrets: _____

Area: _____



Omkrets: _____

Area: _____