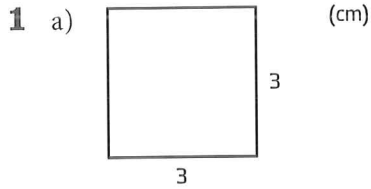
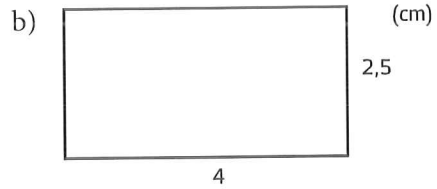


Repetition av area och omkrets

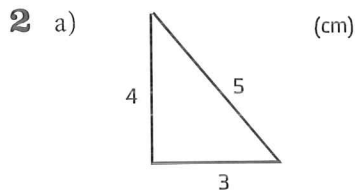
Beräkna omkrets och area av figurerna. Använd $\pi \approx 3$.



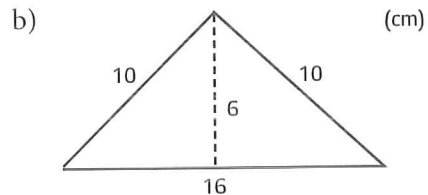
Omkrets: 12 cm
Area: 9 cm²



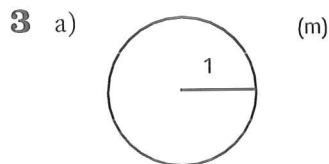
Omkrets: 13 cm
Area: 10 cm²



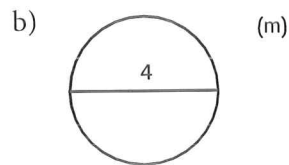
Omkrets: 12 cm
Area: 6 cm²



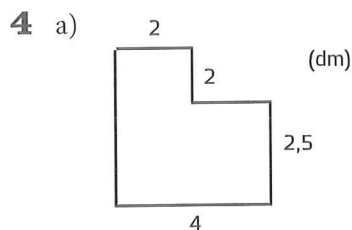
Omkrets: 36 cm
Area: 48 cm²



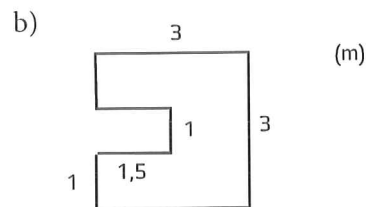
Omkrets: 6 m
Area: 3 m²



Omkrets: 12 m
Area: 12 m²



Omkrets: 17 m
Area: 14 m²



Omkrets: 15 m
Area: 7.5 m²