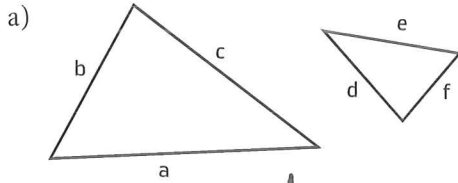
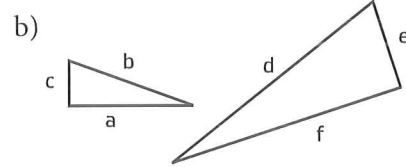


Mer om likformighet

1 Trianglarna är likformiga. Vilka sidor motsvarar varandra?

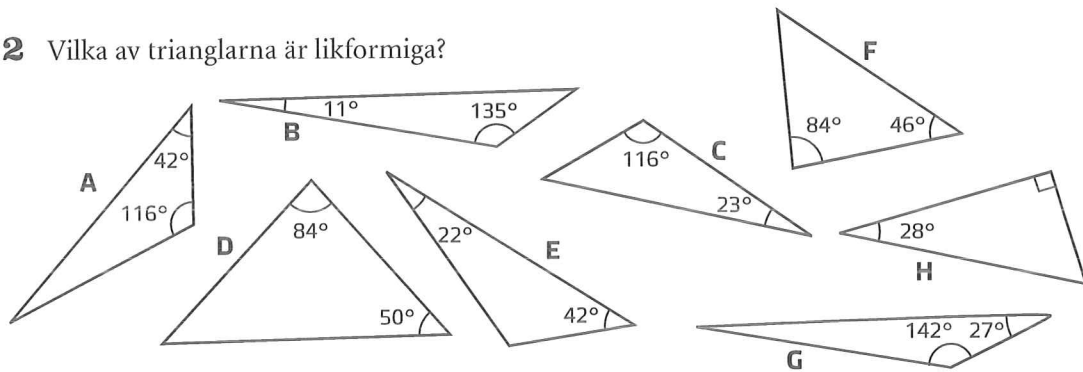


b-f, a-e, c-d



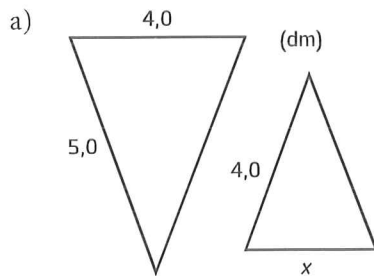
c-e, b-d, f-a

2 Vilka av trianglarna är likformiga?

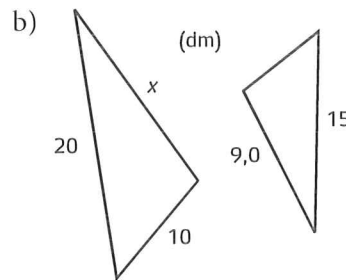


A, C, E D, F

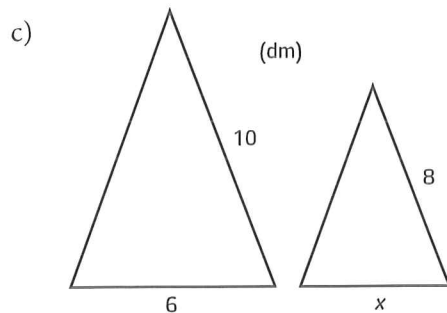
3 Trianglarna är likformiga. Beräkna sidan som är markerad med x.



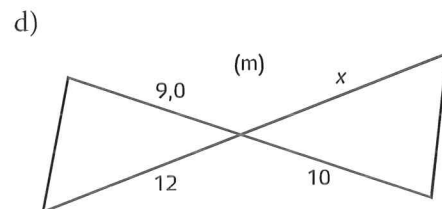
x = 3,2 dm



x = 12 dm



x = 4,8 dm



x = 13,3 m