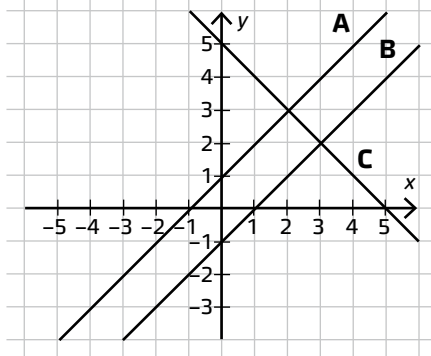


Räta linjens ekvation 2

Skriv räta linjens ekvation för graferna i koordinatsystemet.

1

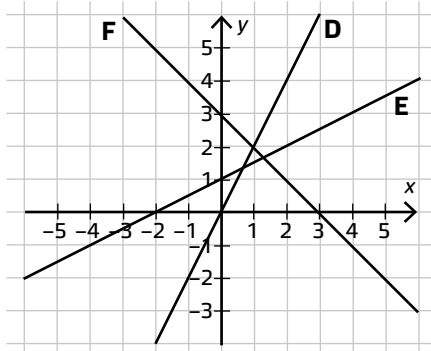


A _____

B _____

C _____

2

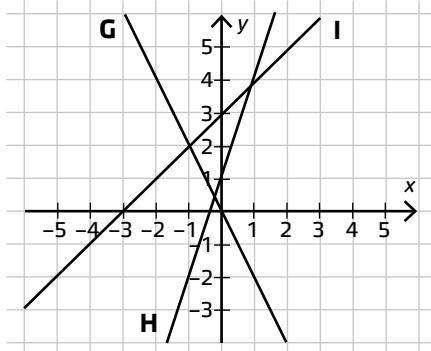


D _____

E _____

F _____

3

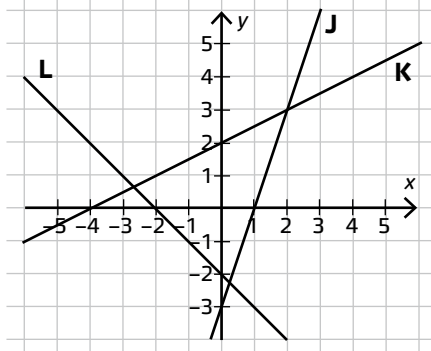


G _____

H _____

I _____

4



J _____

K _____

L _____