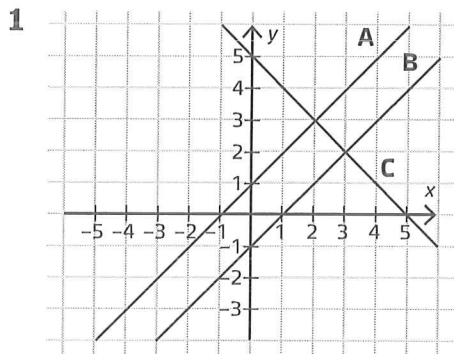
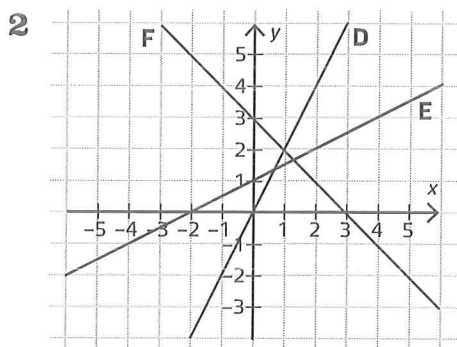


Räta linjens ekvation 2

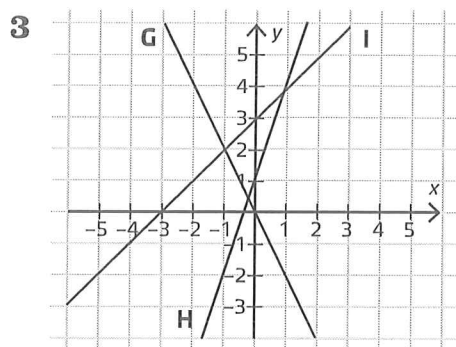
Skriv räta linjens ekvation för graferna i koordinatsystemet.



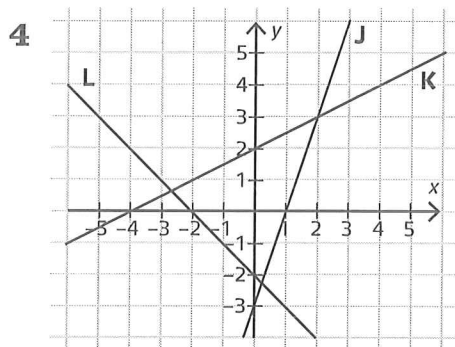
A $y = x + 1$
 B $y = x - 1$
 C $y = -x + 5$



D $y = 2x$
 E $y = 0,5x + 1$
 F $y = -x + 3$



G $y = -2x$
 H $y = 0,5x + 1$
 I $y = x + 3$



J $y = 3x - 3$
 K $y = 0,5x + 2$
 L $y = -x - 2$